

Online Learning

Year 2

Week 1

Soundwaves log in

www.soundwaveskids.com.au

Access code:

wool653

Weekly Task Outline Year 2

You will need access to a digital device and help from a parent/carer to complete the following activities. Approximate times for each activity will be shared on our Google Classroom.

Please go to the subject's folder to enter the work for each session.



	Monday	Tuesday 13/7	Wednesday 14/7	Thursday 15/7	Friday 16/7
Task Morning		<p>English Writing Write about things you did in the holidays during lockdown</p> <p>Spelling Write out your list words. Pick 5 of these words and use them in 5 sentences. Underline the list word you used in each sentence.</p> <p>Reading Read a book of your choice to someone OR log onto your oMe reader account and</p>	<p>English Writing Write about something you learnt about or how to do in the holidays.</p> <p>Spelling Log onto soundwaves online. And play one of the interactive games for the sound of the week. www.soundwaveskids.com.au</p> <p>Access code: wool653</p> <p>Reading Read a book of your choice to someone OR</p>	<p>English Writing Write a thank you letter to mum/dad for everything they did with you in the holidays.</p> <p>Spelling Re-write your spelling word. In your words make each vowel red, and each consonant blue.</p> <p>Reading Read a book of your choice to someone OR log onto your oMe reader account and</p>	<p>English Writing Write about... The first thing I want to do after lockdown is...</p> <p>Spelling Log onto soundwaves online. And play one of the interactive games for the sound of the week. www.soundwaveskids.com.au</p> <p>Access code: wool653</p>

	choose a book to read.	log onto your PiMe reader account and choose a book to read.	choose a book to read.	
Break 30 min	Have a snack and play a game with Mum or Dad.			
Middle	Mathematics Place Value. See attached slide.	Mathematics Ordering 3-digit numbers. See attached slide.	Mathematics Informal length units. See attached slide.	Mathematics Whole number revision/ See attached slide.
Break 30 min	Have some lunch and play a game with Mum or Dad.			
Afternoon	Let's play a fun game. Use the google slide to help you. You have 5 minutes to find as many items as you can.	With Mum or dad's help plan out 5 dinners for the week. Make sure to include some healthy foods.	Go outside and create an obstacle course in your backyard. Draw a diagram of what it looks like. How long does it take you to complete it? Who in your family can complete it the fastest?	Using recyclable items around the house, build or create something that could be a character in a book. Take a photo and upload it.

Year 2 Spelling Words

road

coat

boat

load

soap

hope

cone

stone

close

closing

low

grow

know

throw

yellow

ago

only

most

open

both

Extension Words

almost

approach

donate

drove

fellow

hello

known

lonely

moment

mostly

narrow

ocean

own

shown

suppose

telephone

though

tomato

tomorrow

window

Write your spelling words here

Put them into 5 sentences

1. _____

2. _____

3. _____

4. _____

5. _____

Write about what you did in your holidays in lockdown.

Reading 3-Digit Numbers

Draw a line to match the numerals with the correct written words.

- | | |
|--------|-------------------------------|
| 1. 487 | nine hundred and nineteen |
| 2. 864 | three hundred and sixty-two |
| 3. 362 | seven hundred and thirty-two |
| 4. 732 | eight hundred and sixty-four |
| 5. 919 | four hundred and eighty-seven |

Write the correct numerals next to the written words.

- | | |
|----------------------------------|-------|
| 6. four hundred and thirty-nine | _____ |
| 7. two hundred and thirty-seven | _____ |
| 8. seven hundred and twenty-five | _____ |
| 9. five hundred and seventy | _____ |
| 10. two hundred and eight | _____ |

Write the correct written words next to the numerals.

- | | |
|---------|-------|
| 11. 678 | _____ |
| 12. 285 | _____ |
| 13. 415 | _____ |
| 14. 753 | _____ |
| 15. 902 | _____ |

You have 5 minutes to find as many of these items as you can

INDOOR SCAVENGER HUNT

primary playground


- Find a fork.
- Find something that is red.
- Find a tissue box.
- Find 3 things that have wheels.
- Find an orange crayon.
- Find something that is very soft.
- Find a band-aid.
- Find a key.
- Find 2 socks that match.
- Find something round.
- Find a sticker.
- Find a rubber band.
- Find a pair of glasses.
- Find an envelope.



How many items did you find?

How long did it take you?

Write about something new you
learnt how to do in the holidays.



Ordering 3-Digit Numbers

256

111

369

456

578

219

689

126

905

888

245

299

365

499

587

909

500

611

857

303

Compare and order the numbers above, from smallest to largest.

Largest

Smallest

Weekly Meal Plan

MONDAY	GROCERY LIST
TUESDAY	
WEDNESDAY	
THURSDAY	
FRIDAY	
SATURDAY	
SUNDAY	

Write out your spelling words. Write every vowel in red and every consonant in blue.

e.g. happy

Write your spelling words here




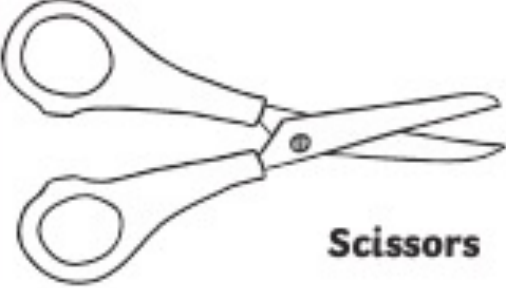
<hr/>	<hr/>
<hr/>	<hr/>
<hr/>	<hr/>
<hr/>	<hr/>
<hr/>	<hr/>
<hr/>	<hr/>
<hr/>	<hr/>
<hr/>	<hr/>
<hr/>	<hr/>

Vowels: a e i o u

Consonants: b c d f g h j k l m n p q r s t v w x y z

Write a letter to your parents saying thank you for everything they did with you in the holidays.

Using some playing cards, measure these things in your house.

Object	Estimation	Actual
 <p data-bbox="329 592 562 634">Drink Bottle</p>		
 <p data-bbox="486 907 579 948">Book</p>		
 <p data-bbox="325 1290 439 1332">Pencil</p>		
 <p data-bbox="422 1659 579 1701">Scissors</p>		

Obstacle Course

How long does it take you to complete it?

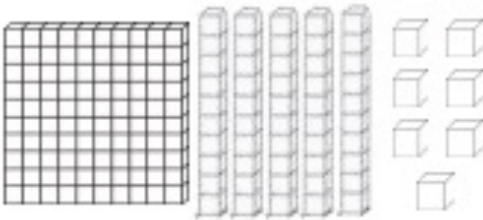
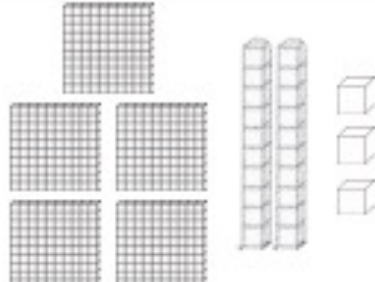



Who in your family can complete it the fastest?

The first thing I want to do after lockdown is...

A large, empty rectangular box with a thin black border, intended for drawing or additional writing.

Base Ten Blocks and Number Expanders

Look at the blocks. Write the matching number in the expander. Remember that only one digit is written in each space on the expander.

 A large 10x10 grid representing 100, four vertical rods representing 40, and six individual cubes representing 6.	<table border="1" data-bbox="592 404 1335 538"><tbody><tr><td></td><td>hundreds</td><td></td><td>tens</td><td></td><td>ones</td></tr></tbody></table>		hundreds		tens		ones
	hundreds		tens		ones		
 Three 10x10 grids representing 300, two vertical rods representing 20, and three individual cubes representing 3.	<table border="1" data-bbox="592 714 1335 849"><tbody><tr><td></td><td>hundreds</td><td></td><td>tens</td><td></td><td>ones</td></tr></tbody></table>		hundreds		tens		ones
	hundreds		tens		ones		
 Two 10x10 grids representing 200, one vertical rod representing 10, and one individual cube representing 1.	<table border="1" data-bbox="592 1025 1335 1160"><tbody><tr><td></td><td>hundreds</td><td></td><td>tens</td><td></td><td>ones</td></tr></tbody></table>		hundreds		tens		ones
	hundreds		tens		ones		
 Five 10x10 grids representing 500, four vertical rods representing 40, and two individual cubes representing 2.	<table border="1" data-bbox="592 1336 1335 1471"><tbody><tr><td></td><td>hundreds</td><td></td><td>tens</td><td></td><td>ones</td></tr></tbody></table>		hundreds		tens		ones
	hundreds		tens		ones		
 Four 10x10 grids representing 400 and eight vertical rods representing 80.	<table border="1" data-bbox="592 1647 1335 1781"><tbody><tr><td></td><td>hundreds</td><td></td><td>tens</td><td></td><td>ones</td></tr></tbody></table>		hundreds		tens		ones
	hundreds		tens		ones		

Draw or glue a photo of your recyclable character here.